





Use the array provided to solve each problem.


1) $20 \times 17 =$




2) $16 \times 10 =$




3) $15 \times 10 =$




4) $19 \times 10 =$



5) $10 \times 14 =$



6) $11 \times 10 =$



Answers

1. _____

2. _____

3. _____

4. _____

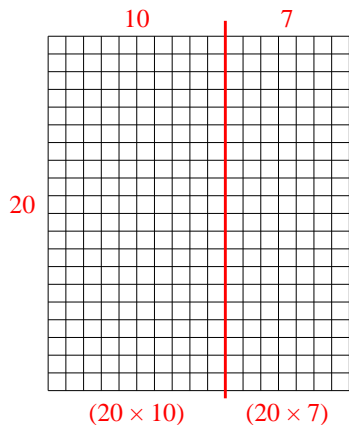
5. _____

6. _____

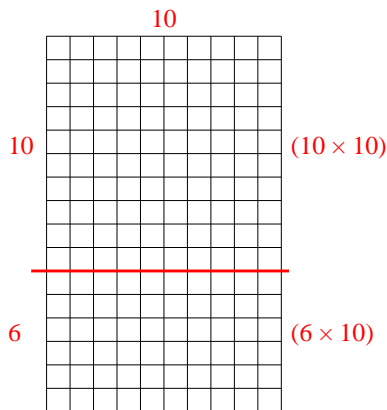


Use the array provided to solve each problem.

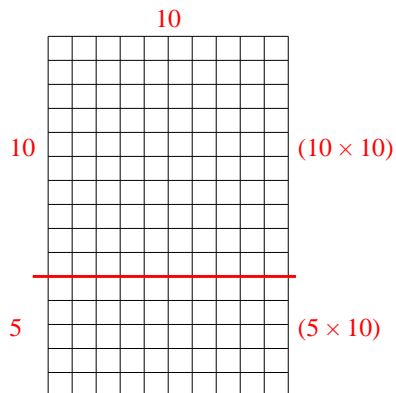
1) $20 \times 17 =$



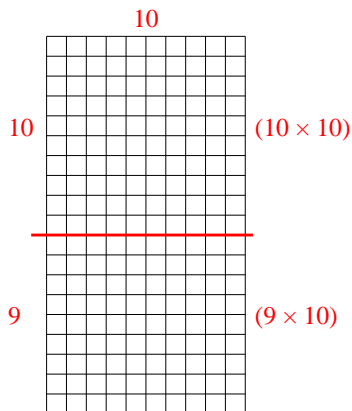
2) $16 \times 10 =$



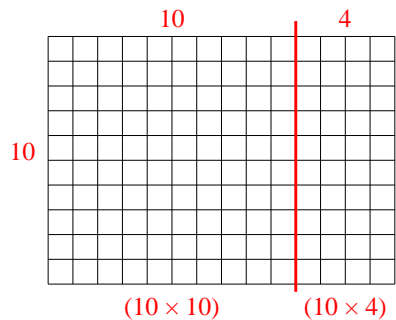
3) $15 \times 10 =$



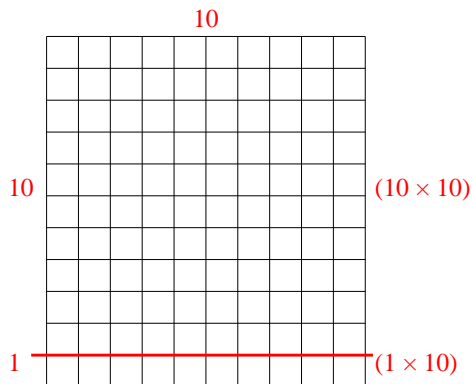
4) $19 \times 10 =$



5) $10 \times 14 =$



6) $11 \times 10 =$



Answers

1. **340**

2. **160**

3. **150**

4. **190**

5. **140**

6. **110**